



AP[®] Biology

2014 Free-Response Questions

© 2014 The College Board. College Board, Advanced Placement Program, AP, AP Central, and the acorn logo are registered trademarks of the College Board.

Visit the College Board on the Web: www.collegeboard.org.

AP Central is the official online home for the AP Program: apcentral.collegeboard.org.

2014 AP[®] BIOLOGY FREE-RESPONSE QUESTIONS

BIOLOGY

Section II

8 Questions

Planning Time—10 minutes

Writing Time—80 minutes

Directions: Questions 1 and 2 are long free-response questions that require about 22 minutes each to answer and are worth 10 points each. Questions 3–8 are short free-response questions that require about 6 minutes each to answer. Questions 3–5 are worth 4 points each and questions 6–8 are worth 3 points each.

Read each question carefully and completely. Write your response in the space provided for each question. Only material written in the space provided will be scored. Answers must be written out in paragraph form. Outlines, bulleted lists, or diagrams alone are not acceptable.

1. Trichomes are hairlike outgrowths of the epidermis of plants that are thought to provide protection against being eaten by herbivores (herbivory). In a certain plant species, stem trichome density is genetically determined.


To investigate variation in stem trichome density within the plant species, a student counted the number of trichomes on the stems of six plants in each of three different populations. The student used the data to calculate the mean trichome density (numbers of hairs per square centimeter) for each population. The results are provided in the table below.

TRICHOME DENSITY IN THREE PLANT POPULATIONS (number of trichomes/cm²)

Population	Plant 1	Plant 2	Plant 3	Plant 4	Plant 5	Plant 6	Mean	Standard Error of the Mean (SEM)
I	8	11	9	10	8	6	9	1
II	12	6	15	9	13	8	11	1
III	13	17	9	14	12	16	14	1

- (a) On the axes provided, **create** an appropriately labeled graph to illustrate the sample means of the three populations to within 95% confidence (i.e., sample mean \pm 2 SEM).
- (b) Based on the sample means and standard errors of the means, **identify** the two populations that are most likely to have statistically significant differences in the mean stem trichome densities. **Justify** your response.
- (c) **Describe** the independent and dependent variables and a control treatment for an experiment to test the hypothesis that higher trichome density in plants is selected for in the presence of herbivores. **Identify** an appropriate duration of the experiment to ensure that natural selection is measured, and **predict** the experimental results that would support the hypothesis.

2014 AP[®] BIOLOGY FREE-RESPONSE QUESTIONS



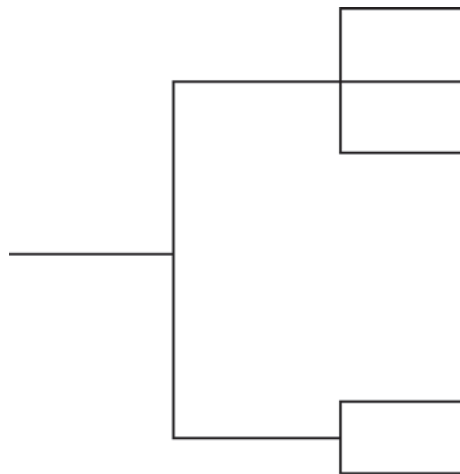
2014 AP[®] BIOLOGY FREE-RESPONSE QUESTIONS

2. Mammalian milk contains antibodies that are produced by the mother’s immune system and passed to offspring during feeding. Mammalian milk also contains a sugar (lactose) and may contain proteins (protein A, protein B, and casein), as indicated in the table.

MILK COMPONENTS IN DIFFERENT MAMMALS

Character	Cat	Cow	Horse	Human	Pig
Lactose	+	+	+	+	+
Protein A	+	+	+	+	+
Protein B	–	+	+	–	+
Casein	–	+	+	–	+
+ indicates the presence of the character, and – indicates the absence of the character					

- (a) Using the data in the table, **construct** a cladogram on the template provided to indicate the most likely evolutionary relationships among the different mammals. **Indicate** on the cladogram where each of the characters most likely arose in the evolutionary process, and **justify** the placement of the characters on the cladogram.
- (b) **Describe** FOUR steps in the activation of the mother’s specific immune response following exposure to a bacterial pathogen. **Predict** how the mother’s immune response would differ upon a second exposure to the same bacterial pathogen a year later.
- (c) **Predict** the most likely consequence for a nursing infant who is exposed to an intestinal bacterial pathogen (e.g., *Salmonella*) to which the mother was exposed three months earlier. **Justify** your prediction.



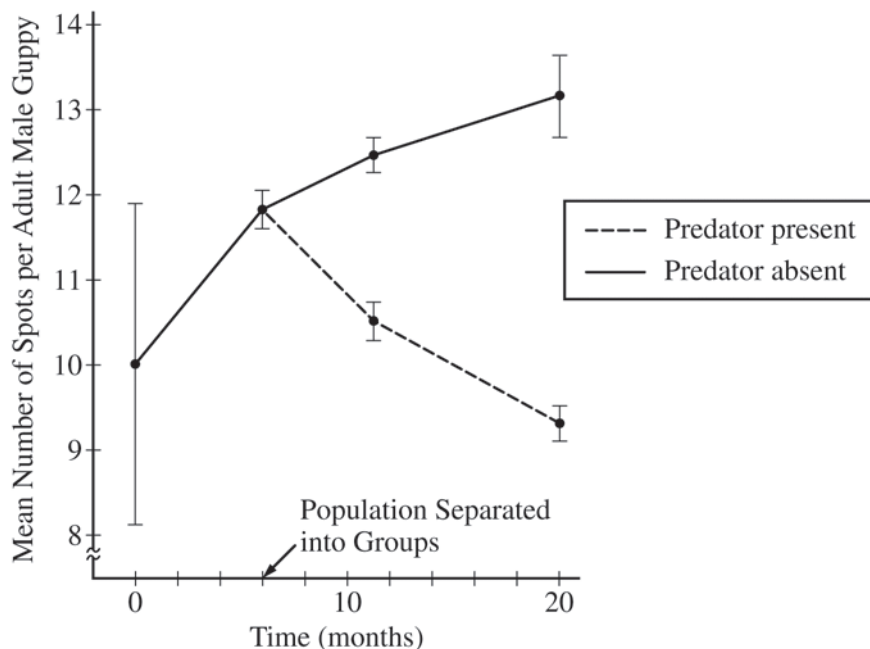
2014 AP[®] BIOLOGY FREE-RESPONSE QUESTIONS

3. As part of a new suburban development, a sports complex consisting of athletic fields and buildings is constructed in a formerly wooded area.
- (a) **Predict** ONE ecological consequence on the local plant community that is likely to result during the site preparation and construction of the sports complex. **Justify** your prediction.
 - (b) To maintain the playing fields, large quantities of water and chemicals are applied regularly to the grass-covered areas. **Predict** ONE effect on the local animal community that might result from regular use and maintenance of the playing fields. **Justify** your prediction.

2014 AP[®] BIOLOGY FREE-RESPONSE QUESTIONS

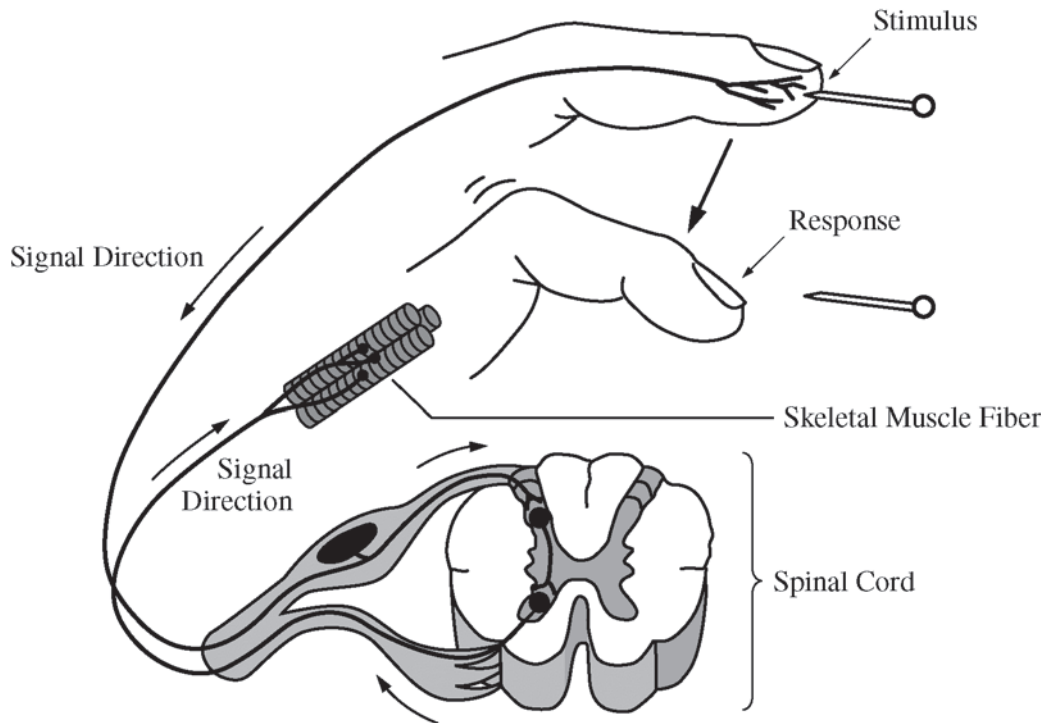
4. Adult male guppies (*Poecilia reticulata*) exhibit genetically determined spots, while juvenile and adult female guppies lack spots. In a study of selection, male and female guppies from genetically diverse populations were collected from different mountain streams and placed together in an isolated environment containing no predators.

The study population was maintained for several generations in the isolated area before being separated into two groups. One group was moved to an artificial pond containing a fish predator, while a second group was moved to an artificial pond containing no predators. The two groups went through several generations in their new environments. At different times during the experiment, the mean number of spots per adult male guppy was determined as shown in the figure below. Vertical bars in the figure represent two standard errors of the mean (SEM).



- (a) **Describe** the change in genetic variation in the population between 0 and 6 months and **provide** reasoning for your description based on the means and SEM.
- (b) **Propose** ONE type of mating behavior that could have resulted in the observed change in the number of spots per adult male guppy between 6 and 20 months in the absence of the predator.
- (c) **Propose** an evolutionary mechanism that explains the change in average number of spots between 6 and 20 months in the presence of the predator.
-
5. Genetically modified crops have been developed that produce a protein that makes the plants resistant to insect pests. Other genetic modifications make the crops more resistant to chemicals that kill plants (herbicides).
- (a) **Describe** TWO potential biological risks of large-scale cultivation and use of such genetically modified plants.
- (b) For each of the risks you described in part (a), **propose** a practical approach for reducing the risk.

2014 AP[®] BIOLOGY FREE-RESPONSE QUESTIONS



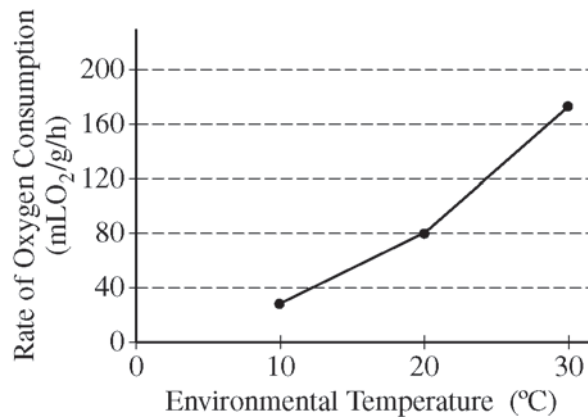
Cross Section of Spinal Cord and Skeletal Muscle Fiber

6. Information processing involves complex neural pathways that require a certain amount of time between recognition of a stimulus and the resulting response. For some types of stimuli, a reflex arc replaces the typical stimulus-response pathway. A representation of a reflex arc is shown in the figure above.

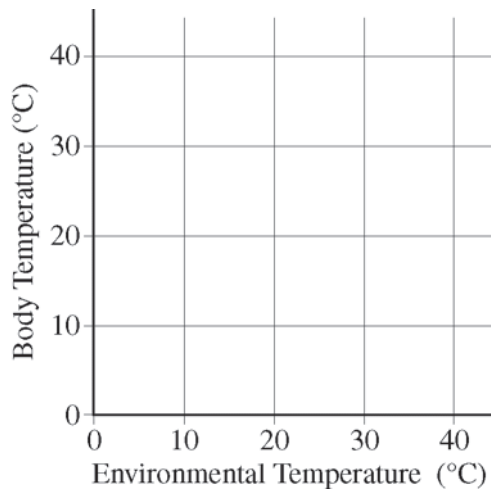
Based on the figure, **describe** TWO ways that the reflex arc differs from typical stimulus-response transmission pathways. **Provide** reasoning to support the claim that reflex arcs help organisms avoid serious injury.

2014 AP[®] BIOLOGY FREE-RESPONSE QUESTIONS

EFFECT OF ENVIRONMENTAL TEMPERATURE
ON RATE OF OXYGEN CONSUMPTION



7. (a) Based on the graph, **describe** a specific method of thermoregulation used by the species of animal. **Provide** support for your answer using the data.
- (b) On the labeled axis provided below, **draw** a line to indicate the most likely relationship between body temperature and environmental temperature in the species.



2014 AP[®] BIOLOGY FREE-RESPONSE QUESTIONS

8. A research team has genetically engineered a strain of fruit flies to eliminate errors during DNA replication. The team claims that this will eliminate genetic variation in the engineered flies. A second research team claims that eliminating errors during DNA replication will not entirely eliminate genetic variation in the engineered flies.
- (a) **Provide** ONE piece of evidence that would indicate new genetic variation has occurred in the engineered flies.
 - (b) **Describe** ONE mechanism that could lead to genetic variation in the engineered strain of flies.
 - (c) **Describe** how genetic variation in a population contributes to the process of evolution in the population.

STOP

END OF EXAM