



2000 Advanced Placement Program® Free-Response Questions

The materials included in these files are intended for use by AP® teachers for course and exam preparation in the classroom; permission for any other use must be sought from the Advanced Placement Program. Teachers may reproduce them, in whole or in part, in limited quantities, for face-to-face teaching purposes but may not mass distribute the materials, electronically or otherwise. These materials and any copies made of them may not be resold, and the copyright notices must be retained as they appear here. This permission does not apply to any third-party copyrights contained herein.

These materials were produced by Educational Testing Service (ETS), which develops and administers the examinations of the Advanced Placement Program for the College Board. The College Board and Educational Testing Service (ETS) are dedicated to the principle of equal opportunity, and their programs, services, and employment policies are guided by that principle.

The College Board is a national nonprofit membership association dedicated to preparing, inspiring, and connecting students to college and opportunity. Founded in 1900, the association is composed of more than 3,800 schools, colleges, universities, and other educational organizations. Each year, the College Board serves over three million students and their parents, 22,000 high schools, and 5,000 colleges, through major programs and services in college admission, guidance, assessment, financial aid, enrollment, and teaching and learning. Among its best-known programs are the SAT®, the PSAT/NMSQT®, the Advanced Placement Program® (AP®), and Pacesetter®. The College Board is committed to the principles of equity and excellence, and that commitment is embodied in all of its programs, services, activities, and concerns.

Copyright © 2000 by College Entrance Examination Board and Educational Testing Service. All rights reserved. College Board, Advanced Placement Program, AP, and the acorn logo are registered trademarks of the College Entrance Examination Board.



2000 AP[®] MUSIC THEORY FREE-RESPONSE QUESTIONS

SECTION II, Part A

Music Theory


Time—Approximately 63 minutes

ANSWER QUESTIONS 1-6 IN THE SPACES PROVIDED. IF YOU NEED TO REWRITE YOUR ANSWER TO ANY QUESTION, USE THE BLANK PAGES AT THE END OF THE BOOKLET AND INDICATE ON THE ORIGINAL PAGE WHERE YOUR FINAL ANSWER IS.


Questions 1-2


For each of these questions, you are to notate on the staves provided the correct pitch and rhythm of a short melody that you will hear. In each case, the pulse will be established before the first playing of the melody.


Question 1. The melody will be played three times. There will be a pause of 30 seconds after the first playing and a 1-minute pause after each subsequent playing. There are no rests in the melody you will hear. It will be played on a trombone.

Now listen to the melody for the first time and begin to notate it. 

Andante




The melody for **Question 1** will now be played a second time. 

The melody for **Question 1** will now be played a third and final time. 


2000 AP[®] MUSIC THEORY FREE-RESPONSE QUESTIONS


Question 2. The melody will be played four times. There will be a pause of 30 seconds after the first playing and a 1-minute pause after each subsequent playing. There are no rests in the melody you will hear. It will be played on a viola.


Now listen to the melody for the first time and begin to notate it. 

Andante grazioso



The melody for **Question 2** will now be played a second time. 

The melody for **Question 2** will now be played a third time. 

The melody for **Question 2** will now be played a fourth and final time. 

PLEASE GO ON TO THE NEXT SET OF QUESTIONS.


2000 AP[®] MUSIC THEORY FREE-RESPONSE QUESTIONS

Questions 3-4

For each of these questions, you will hear a harmonic progression in four parts. In each case, the progression will be played four times. There will be a pause of 30 seconds after the first playing and a 1-minute pause after each subsequent playing. For each question, please do the following.


- Notate only the soprano and bass voices. Do not notate the alto and tenor voices.
- On the lines provided under each staff, write in the Roman and Arabic numerals that indicate the chords and their inversions.


Question 3. Before listening to the first playing, please look at the staff below. Notice that there are eight chords in the progression; the soprano and bass notes and the Roman numeral of the first chord are given.


Now listen to the progression for the first time and begin working. 



f: i

The progression for **Question 3** will now be played a second time. 


The progression for **Question 3** will now be played a third time. 

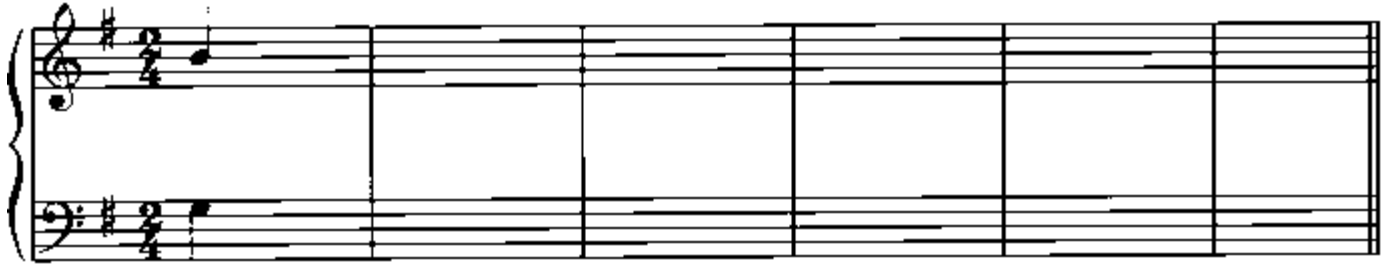
The progression for **Question 3** will now be played a fourth and final time. 

2000 AP[®] MUSIC THEORY FREE-RESPONSE QUESTIONS


Question 4. Before listening to the first playing, please look at the staff below. Notice that there are eleven chords in the progression; the soprano and bass notes and the Roman numeral of the first chord are given.


Remember to notate only the soprano and bass voices and to provide the numerals indicating the chords and their inversions.


Now listen to the progression for the first time and begin working. 



G: I _____

The progression for **Question 4** will now be played a second time. 

The progression for **Question 4** will now be played a third time. 

The progression for **Question 4** will now be played a fourth and final time. 

THE REMAINING FREE-RESPONSE QUESTIONS FOR THE THEORY TEST ARE WITHOUT AURAL STIMULUS. YOU MAY ANSWER THEM IN THE ORDER YOU CHOOSE. YOU HAVE A TOTAL OF 40 MINUTES TO COMPLETE FREE-RESPONSE QUESTIONS 5 AND 6. A SUGGESTED TIME FOR EACH QUESTION IS PRINTED IN YOUR TEST BOOKLET. READ THE TWO QUESTIONS CAREFULLY AND USE YOUR TIME EFFECTIVELY. NOW TURN THE PAGE AND BEGIN WORK.

2000 AP[®] MUSIC THEORY FREE-RESPONSE QUESTIONS

Question 5 (Suggested time—20 minutes)

Realize the figured bass below in four voices, following traditional eighteenth-century voice-leading procedures. Continue logically from the spacing of the first chord. In the space below each chord, supply the Roman numeral that appropriately indicates harmonic function.

6
6
4
6
6
7
4
4
5
2

#

g: — — — — — — — — —

2000 AP[®] MUSIC THEORY FREE-RESPONSE QUESTIONS

Question 6 (Suggested time—20 minutes)

Complete the bass line for the melody below. Your bass line should make both melodic and harmonic sense in common practice style and should remain consistent with the given first phrase. Show your harmonization of the melody by placing Roman numerals with inversion symbols under your bass line. Do not notate an alto or tenor line.

Observe the following in composing the bass line and in making chord choices.

- Give melodic interest to the bass line.
- Vary the motion of the bass line in relation to the soprano.
- Use an appropriate cadence at each phrase ending.
- Use at least two chords or two positions of the same chord per measure.
- Note values ranging from half notes to eighth notes are permitted.

Key: F

Chord Analysis: I V₄⁶ I⁶ IV V⁷ I

Chord Analysis:

END OF WRITTEN EXAMINATION

2000 AP[®] MUSIC THEORY FREE-RESPONSE QUESTIONS
