



2000 Advanced Placement Program® Free-Response Questions

The materials included in these files are intended for use by AP® teachers for course and exam preparation in the classroom; permission for any other use must be sought from the Advanced Placement Program. Teachers may reproduce them, in whole or in part, in limited quantities, for face-to-face teaching purposes but may not mass distribute the materials, electronically or otherwise. These materials and any copies made of them may not be resold, and the copyright notices must be retained as they appear here. This permission does not apply to any third-party copyrights contained herein.

These materials were produced by Educational Testing Service (ETS), which develops and administers the examinations of the Advanced Placement Program for the College Board. The College Board and Educational Testing Service (ETS) are dedicated to the principle of equal opportunity, and their programs, services, and employment policies are guided by that principle.

The College Board is a national nonprofit membership association dedicated to preparing, inspiring, and connecting students to college and opportunity.

Founded in 1900, the association is composed of more than 3,800 schools, colleges, universities, and other educational organizations. Each year, the College Board serves over three million students and their parents, 22,000 high schools, and 5,000 colleges, through major programs and services in college admission, guidance, assessment, financial aid, enrollment, and teaching and learning. Among its best-known programs are the SAT®, the PSAT/NMSQT®, the Advanced Placement Program® (AP®), and Pacesetter®. The College Board is committed to the principles of equity and excellence, and that commitment is embodied in all of its programs, services, activities, and concerns.

Copyright © 2000 by College Entrance Examination Board and Educational Testing Service. All rights reserved. College Board, Advanced Placement Program, AP, and the acorn logo are registered trademarks of the College Entrance Examination Board.



STANDARD REDUCTION POTENTIALS IN AQUEOUS SOLUTION AT 25°C

Half-reaction	$E^\circ(\text{V})$
$\text{Li}^+ + e^- \rightarrow \text{Li}(s)$	-3.05
$\text{Cs}^+ + e^- \rightarrow \text{Cs}(s)$	-2.92
$\text{K}^+ + e^- \rightarrow \text{K}(s)$	-2.92
$\text{Rb}^+ + e^- \rightarrow \text{Rb}(s)$	-2.92
$\text{Ba}^{2+} + 2 e^- \rightarrow \text{Ba}(s)$	-2.90
$\text{Sr}^{2+} + 2 e^- \rightarrow \text{Sr}(s)$	-2.89
$\text{Ca}^{2+} + 2 e^- \rightarrow \text{Ca}(s)$	-2.87
$\text{Na}^+ + e^- \rightarrow \text{Na}(s)$	-2.71
$\text{Mg}^{2+} + 2 e^- \rightarrow \text{Mg}(s)$	-2.37
$\text{Be}^{2+} + 2 e^- \rightarrow \text{Be}(s)$	-1.70
$\text{Al}^{3+} + 3 e^- \rightarrow \text{Al}(s)$	-1.66
$\text{Mn}^{2+} + 2 e^- \rightarrow \text{Mn}(s)$	-1.18
$\text{Zn}^{2+} + 2 e^- \rightarrow \text{Zn}(s)$	-0.76
$\text{Cr}^{3+} + 3 e^- \rightarrow \text{Cr}(s)$	-0.74
$\text{Fe}^{2+} + 2 e^- \rightarrow \text{Fe}(s)$	-0.44
$\text{Cr}^{3+} + e^- \rightarrow \text{Cr}^{2+}$	-0.41
$\text{Cd}^{2+} + 2 e^- \rightarrow \text{Cd}(s)$	-0.40
$\text{Tl}^+ + e^- \rightarrow \text{Tl}(s)$	-0.34
$\text{Co}^{2+} + 2 e^- \rightarrow \text{Co}(s)$	-0.28
$\text{Ni}^{2+} + 2 e^- \rightarrow \text{Ni}(s)$	-0.25
$\text{Sn}^{2+} + 2 e^- \rightarrow \text{Sn}(s)$	-0.14
$\text{Pb}^{2+} + 2 e^- \rightarrow \text{Pb}(s)$	-0.13
$2 \text{H}^+ + 2 e^- \rightarrow \text{H}_2(g)$	0.00
$\text{S}(s) + 2 \text{H}^+ + 2 e^- \rightarrow \text{H}_2\text{S}(g)$	0.14
$\text{Sn}^{4+} + 2 e^- \rightarrow \text{Sn}^{2+}$	0.15
$\text{Cu}^{2+} + e^- \rightarrow \text{Cu}^+$	0.15
$\text{Cu}^{2+} + 2 e^- \rightarrow \text{Cu}(s)$	0.34
$\text{Cu}^+ + e^- \rightarrow \text{Cu}(s)$	0.52
$\text{I}_2(s) + 2 e^- \rightarrow 2 \text{I}^-$	0.53
$\text{Fe}^{3+} + e^- \rightarrow \text{Fe}^{2+}$	0.77
$\text{Hg}_2^{2+} + 2 e^- \rightarrow 2 \text{Hg}(l)$	0.79
$\text{Ag}^+ + e^- \rightarrow \text{Ag}(s)$	0.80
$\text{Hg}^{2+} + 2 e^- \rightarrow \text{Hg}(l)$	0.85
$2 \text{Hg}^{2+} + 2 e^- \rightarrow \text{Hg}_2^{2+}$	0.92
$\text{Br}_2(l) + 2 e^- \rightarrow 2 \text{Br}^-$	1.07
$\text{O}_2(g) + 4 \text{H}^+ + 4 e^- \rightarrow 2 \text{H}_2\text{O}(l)$	1.23
$\text{Cl}_2(g) + 2 e^- \rightarrow 2 \text{Cl}^-$	1.36
$\text{Au}^{3+} + 3 e^- \rightarrow \text{Au}(s)$	1.50
$\text{Co}^{3+} + e^- \rightarrow \text{Co}^{2+}$	1.82
$\text{F}_2(g) + 2 e^- \rightarrow 2 \text{F}^-$	2.87

GO ON TO THE NEXT PAGE.

ADVANCED PLACEMENT CHEMISTRY EQUATIONS AND CONSTANTS

ATOMIC STRUCTURE

$$\Delta E = h\nu$$

$$c = \lambda\nu$$

$$\lambda = \frac{h}{m\nu}$$

$$p = m\nu$$

$$E_n = \frac{-2.178 \times 10^{-18}}{n^2} \text{ joule}$$

E = energy

ν = frequency

λ = wavelength

p = momentum

v = velocity

n = principal quantum number

m = mass

EQUILIBRIUM

$$K_a = \frac{[\text{H}^+][\text{A}^-]}{[\text{HA}]}$$

$$K_b = \frac{[\text{OH}^-][\text{HB}^+]}{[\text{B}]}$$

$$K_w = [\text{OH}^-][\text{H}^+] = 1.0 \times 10^{-14} \text{ @ } 25^\circ\text{C}$$

$$= K_a \times K_b$$

$$\text{pH} = -\log [\text{H}^+], \text{pOH} = -\log [\text{OH}^-]$$

$$14 = \text{pH} + \text{pOH}$$

$$\text{pH} = \text{p}K_a + \log \frac{[\text{A}^-]}{[\text{HA}]}$$

$$\text{pOH} = \text{p}K_b + \log \frac{[\text{HB}^+]}{[\text{B}]}$$

$$\text{p}K_a = -\log K_a, \text{p}K_b = -\log K_b$$

$$K_p = K_c(RT)^{\Delta n},$$

where Δn = moles product gas – moles reactant gas

$$\text{Speed of light, } c = 3.0 \times 10^8 \text{ m s}^{-1}$$

$$\text{Planck's constant, } h = 6.63 \times 10^{-34} \text{ J s}$$

$$\text{Boltzmann's constant, } k = 1.38 \times 10^{-23} \text{ J K}^{-1}$$

$$\text{Avogadro's number} = 6.022 \times 10^{23} \text{ molecules mol}^{-1}$$

$$\text{Electron charge, } e = -1.602 \times 10^{-19} \text{ coulomb}$$

$$1 \text{ electron volt per atom} = 96.5 \text{ kJ mol}^{-1}$$

Equilibrium Constants

K_a (weak acid)

K_b (weak base)

K_w (water)

K_p (gas pressure)

K_c (molar concentrations)

S° = standard entropy

H° = standard enthalpy

G° = standard free energy

E° = standard reduction potential

T = temperature

n = moles

m = mass

q = heat

c = specific heat capacity

C_p = molar heat capacity at constant pressure

1 faraday \mathcal{F} = 96,500 coulombs

THERMOCHEMISTRY

$$\Delta S^\circ = \sum S^\circ \text{ products} - \sum S^\circ \text{ reactants}$$

$$\Delta H^\circ = \sum \Delta H_f^\circ \text{ products} - \sum \Delta H_f^\circ \text{ reactants}$$

$$\Delta G^\circ = \sum \Delta G_f^\circ \text{ products} - \sum \Delta G_f^\circ \text{ reactants}$$

$$\Delta G^\circ = \Delta H^\circ - T\Delta S^\circ$$

$$= -RT \ln K = -2.303 RT \log K$$

$$= -n \mathcal{F} E^\circ$$

$$\Delta G = \Delta G^\circ + RT \ln Q = \Delta G^\circ + 2.303 RT \log Q$$

$$q = mc\Delta T$$

$$C_p = \frac{\Delta H}{\Delta T}$$

GO ON TO THE NEXT PAGE.

GASES, LIQUIDS, AND SOLUTIONS

$$PV = nRT$$

$$\left(P + \frac{n^2a}{V^2}\right)(V - nb) = nRT$$

$$P_A = P_{total} \times X_A, \text{ where } X_A = \frac{\text{moles A}}{\text{total moles}}$$

$$P_{total} = P_A + P_B + P_C + \dots$$

$$n = \frac{m}{M}$$

$$K = ^\circ\text{C} + 273$$

$$\frac{P_1V_1}{T_1} = \frac{P_2V_2}{T_2}$$

$$D = \frac{m}{V}$$

$$u_{rms} = \sqrt{\frac{3kT}{m}} = \sqrt{\frac{3RT}{M}}$$

$$KE \text{ per molecule} = \frac{1}{2}mv^2$$

$$KE \text{ per mole} = \frac{3}{2}RT$$

$$\frac{r_1}{r_2} = \sqrt{\frac{M_2}{M_1}}$$

molarity, M = moles solute per liter solution

molality = moles solute per kilogram solvent

$$\Delta T_f = iK_f \times \text{molality}$$

$$\Delta T_b = iK_b \times \text{molality}$$

$$\pi = \frac{nRT}{V} i$$

P = pressure

V = volume

T = temperature

n = number of moles

D = density

m = mass

v = velocity

u_{rms} = root-mean-square speed

KE = kinetic energy

r = rate of effusion

M = molar mass

π = osmotic pressure

i = van't Hoff factor

K_f = molal freezing-point depression constant

K_b = molal boiling-point elevation constant

Q = reaction quotient

I = current (amperes)

q = charge (coulombs)

t = time (seconds)

E° = standard reduction potential

K = equilibrium constant

Gas constant, $R = 8.31 \text{ J mol}^{-1} \text{ K}^{-1}$

$= 0.0821 \text{ L atm mol}^{-1} \text{ K}^{-1}$

$= 8.31 \text{ volt coulomb mol}^{-1} \text{ K}^{-1}$

Boltzmann's constant, $k = 1.38 \times 10^{-23} \text{ J K}^{-1}$

K_f for $\text{H}_2\text{O} = 1.86 \text{ K kg mol}^{-1}$

K_b for $\text{H}_2\text{O} = 0.512 \text{ K kg mol}^{-1}$

STP = 0.000°C and 1.000 atm

Faraday's constant, $\mathcal{F} = 96,500 \text{ coulombs per mole of electrons}$

OXIDATION-REDUCTION; ELECTROCHEMISTRY

$$Q = \frac{[\text{C}]^c [\text{D}]^d}{[\text{A}]^a [\text{B}]^b}, \text{ where } a \text{ A} + b \text{ B} \rightarrow c \text{ C} + d \text{ D}$$

$$I = \frac{q}{t}$$

$$E_{\text{cell}} = E_{\text{cell}}^\circ - \frac{RT}{n\mathcal{F}} \ln Q = E_{\text{cell}}^\circ - \frac{0.0592}{n} \log Q @ 25^\circ\text{C}$$

$$\log K = \frac{nE^\circ}{0.0592}$$

GO ON TO THE NEXT PAGE.

2000 AP[®] CHEMISTRY FREE-RESPONSE QUESTIONS

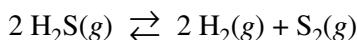
CHEMISTRY—SECTION II (Total time—90 minutes)

Part A Time—40 minutes

YOU MAY USE YOUR CALCULATOR FOR PART A.

CLEARLY SHOW THE METHOD USED AND STEPS INVOLVED IN ARRIVING AT YOUR ANSWERS. It is to your advantage to do this, because you may earn partial credit if you do and you will receive little or no credit if you do not. Attention should be paid to significant figures. Be sure to write all your answers to the questions on the lined pages following each question in this booklet.

Answer Question 1 below. The Section II score weighting for this question is 20 percent.



1. When heated, hydrogen sulfide gas decomposes according to the equation above. A 3.40 g sample of $\text{H}_2\text{S}(g)$ is introduced into an evacuated rigid 1.25 L container. The sealed container is heated to 483 K, and 3.72×10^{-2} mol of $\text{S}_2(g)$ is present at equilibrium.
- (a) Write the expression for the equilibrium constant, K_c , for the decomposition reaction represented above.
- (b) Calculate the equilibrium concentration, in mol L^{-1} , of the following gases in the container at 483 K.
- (i) $\text{H}_2(g)$
- (ii) $\text{H}_2\text{S}(g)$
- (c) Calculate the value of the equilibrium constant, K_c , for the decomposition reaction at 483 K.
- (d) Calculate the partial pressure of $\text{S}_2(g)$ in the container at equilibrium at 483 K.
- (e) For the reaction $\text{H}_2(g) + \frac{1}{2} \text{S}_2(g) \rightleftharpoons \text{H}_2\text{S}(g)$ at 483 K, calculate the value of the equilibrium constant, K_c .

2000 AP[®] CHEMISTRY FREE-RESPONSE QUESTIONS

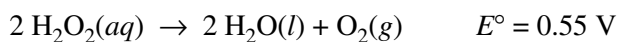
Answer EITHER Question 2 below OR Question 3 printed on page 8. Only one of these two questions will be graded. If you start both questions, be sure to cross out the question you do not want graded. The Section II score weighting for the question you choose is 20 percent.

2. Answer the following questions that relate to electrochemical reactions.

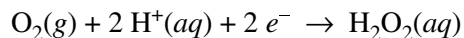
(a) Under standard conditions at 25°C, Zn(s) reacts with Co²⁺(aq) to produce Co(s).

- Write the balanced equation for the oxidation half reaction.
- Write the balanced net-ionic equation for the overall reaction.
- Calculate the standard potential, E° , for the overall reaction at 25°C.

(b) At 25°C, H₂O₂ decomposes according to the following equation.



- Determine the value of the standard free energy change, ΔG° , for the reaction at 25°C.
- Determine the value of the equilibrium constant, K_{eq} , for the reaction at 25°C.
- The standard reduction potential, E° , for the half reaction $\text{O}_2(\text{g}) + 4 \text{H}^+(\text{aq}) + 4 e^- \rightarrow 2 \text{H}_2\text{O}(\text{l})$ has a value of 1.23 V. Using this information in addition to the information given above, determine the value of the standard reduction potential, E° , for the half reaction below.

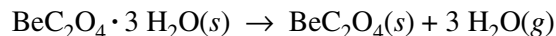


(c) In an electrolytic cell, Cu(s) is produced by the electrolysis of CuSO₄(aq). Calculate the maximum mass of Cu(s) that can be deposited by a direct current of 100. amperes passed through 5.00 L of 2.00 M CuSO₄(aq) for a period of 1.00 hour.

2000 AP® CHEMISTRY FREE-RESPONSE QUESTIONS

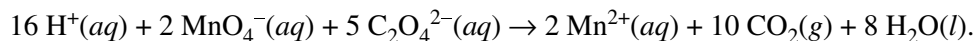
3. Answer the following questions about $\text{BeC}_2\text{O}_4(s)$ and its hydrate.

- (a) Calculate the mass percent of carbon in the hydrated form of the solid that has the formula $\text{BeC}_2\text{O}_4 \cdot 3 \text{H}_2\text{O}$
- (b) When heated to $220.^\circ\text{C}$, $\text{BeC}_2\text{O}_4 \cdot 3 \text{H}_2\text{O}(s)$ dehydrates completely as represented below.



If 3.21 g of $\text{BeC}_2\text{O}_4 \cdot 3 \text{H}_2\text{O}(s)$ is heated to $220.^\circ\text{C}$, calculate

- (i) the mass of $\text{BeC}_2\text{O}_4(s)$ formed, and,
- (ii) the volume of the $\text{H}_2\text{O}(g)$ released, measured at $220.^\circ\text{C}$ and 735 mm Hg.
- (c) A 0.345 g sample of anhydrous BeC_2O_4 , which contains an inert impurity, was dissolved in sufficient water to produce 100. mL of solution. A 20.0 mL portion of the solution was titrated with $\text{KMnO}_4(aq)$. The balanced equation for the reaction that occurred is as follows.



The volume of 0.0150 M $\text{KMnO}_4(aq)$ required to reach the equivalence point was 17.80 mL.

- (i) Identify the reducing agent in the titration reaction.
- (ii) For the titration at the equivalence point, calculate the number of moles of each of the following that reacted.
- $\text{MnO}_4^-(aq)$
 - $\text{C}_2\text{O}_4^{2-}(aq)$
- (iii) Calculate the total number of moles of $\text{C}_2\text{O}_4^{2-}(aq)$ that were present in the 100. mL of prepared solution.
- (iv) Calculate the mass percent of $\text{BeC}_2\text{O}_4(s)$ in the impure 0.345 g sample.

2000 AP[®] CHEMISTRY FREE-RESPONSE QUESTIONS

CHEMISTRY

Part B

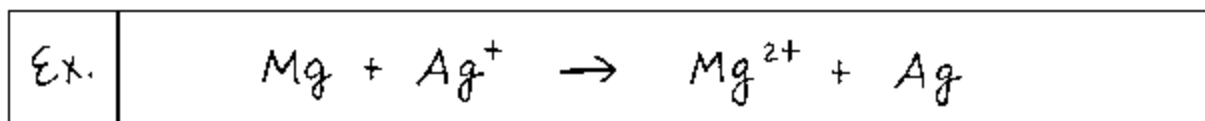
Time—50 minutes

NO CALCULATORS MAY BE USED FOR PART B.

Answer Question 4 below. The Section II score weighting for this question is 15 percent.

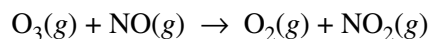
4. Write the formulas to show the reactants and the products for any FIVE of the laboratory situations described below. Answers to more than five choices will not be graded. In all cases, a reaction occurs. Assume that solutions are aqueous unless otherwise indicated. Represent substances in solution as ions if the substances are extensively ionized. Omit formulas for any ions or molecules that are unchanged by the reaction. You need not balance the equations.

Example: A strip of magnesium is added to a solution of silver nitrate.



- (a) A small piece of calcium metal is added to hot distilled water.
- (b) Butanol is burned in air.
- (c) Excess concentrated ammonia solution is added to a solution of nickel(II) sulfate.
- (d) A solution of copper(II) chloride is added to a solution of sodium sulfide.
- (e) A solution of tin(II) nitrate is added to a solution of silver nitrate.
- (f) Excess hydrobromic acid solution is added to a solution of potassium hydrogen carbonate.
- (g) Powdered strontium oxide is added to distilled water.
- (h) Carbon monoxide gas is passed over hot iron(III) oxide.

2000 AP[®] CHEMISTRY FREE-RESPONSE QUESTIONS



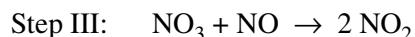
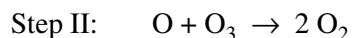
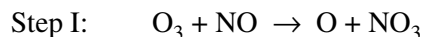
6. Consider the reaction represented above.
- (a) Referring to the data in the table below, calculate the standard enthalpy change, ΔH° , for the reaction at 25°C. Be sure to show your work.

	O ₃ (g)	NO(g)	NO ₂ (g)
Standard enthalpy of formation, ΔH_f° , at 25°C (kJ mol ⁻¹)	143	90.	33

- (b) Make a qualitative prediction about the magnitude of the standard entropy change, ΔS° , for the reaction at 25°C. Justify your answer.
- (c) On the basis of your answers to parts (a) and (b), predict the sign of the standard free-energy change, ΔG° , for the reaction at 25°C. Explain your reasoning.
- (d) Use the information in the table below to write the rate-law expression for the reaction, and explain how you obtained your answer.

Experiment Number	Initial [O ₃] (mol L ⁻¹)	Initial [NO] (mol L ⁻¹)	Initial Rate of Formation of NO ₂ (mol L ⁻¹ s ⁻¹)
1	0.0010	0.0010	x
2	0.0010	0.0020	$2x$
3	0.0020	0.0010	$2x$
4	0.0020	0.0020	$4x$

- (e) The following three-step mechanism is proposed for the reaction. Identify the step that must be the slowest in order for this mechanism to be consistent with the rate-law expression derived in part (d). Explain.



2000 AP[®] CHEMISTRY FREE-RESPONSE QUESTIONS

Answer EITHER Question 7 below OR Question 8 printed on page 13. Only one of these two questions will be graded. If you start both questions, be sure to cross out the question you do not want graded. The Section II score weighting for the question you choose is 15 percent.

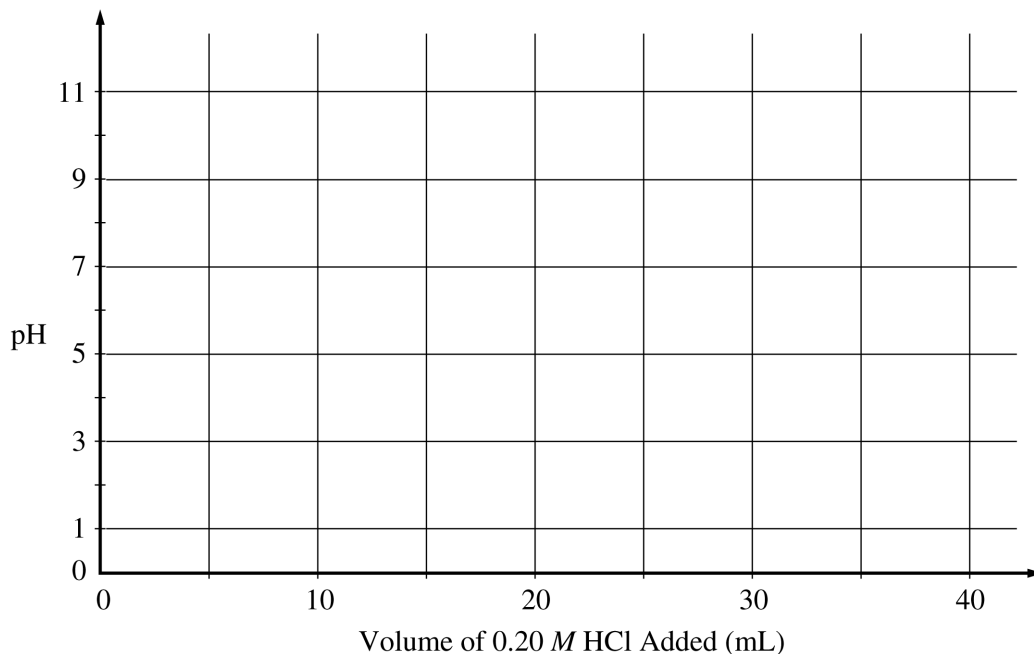
7. Answer the following questions about the element selenium, Se (atomic number 34).
- (a) Samples of natural selenium contain six stable isotopes. In terms of atomic structure, explain what these isotopes have in common, and how they differ.
 - (b) Write the complete electron configuration (e.g., $1s^2 2s^2 \dots$ etc.) for a selenium atom in the ground state. Indicate the number of unpaired electrons in the ground-state atom, and explain your reasoning.
 - (c) In terms of atomic structure, explain why the first ionization energy of selenium is
 - (i) less than that of bromine (atomic number 35), and
 - (ii) greater than that of tellurium (atomic number 52).
 - (d) Selenium reacts with fluorine to form SeF_4 . Draw the complete Lewis electron-dot structure for SeF_4 and sketch the molecular structure. Indicate whether the molecule is polar or nonpolar, and justify your answer.

2000 AP® CHEMISTRY FREE-RESPONSE QUESTIONS

8. A volume of 30.0 mL of 0.10 M $\text{NH}_3(aq)$ is titrated with 0.20 M $\text{HCl}(aq)$. The value of the base-dissociation constant, K_b , for NH_3 in water is 1.8×10^{-5} at 25°C.

(a) Write the net-ionic equation for the reaction of $\text{NH}_3(aq)$ with $\text{HCl}(aq)$.

(b) Using the axes provided below, sketch the titration curve that results when a total of 40.0 mL of 0.20 M $\text{HCl}(aq)$ is added dropwise to the 30.0 mL volume of 0.10 M $\text{NH}_3(aq)$.



(c) From the table below, select the most appropriate indicator for the titration. Justify your choice.

Indicator	$\text{p}K_a$
Methyl Red	5.5
Bromothymol Blue	7.1
Phenolphthalein	8.7

(d) If equal volumes of 0.10 M $\text{NH}_3(aq)$ and 0.10 M $\text{NH}_4\text{Cl}(aq)$ are mixed, is the resulting solution acidic, neutral, or basic? Explain.

END OF EXAMINATION