

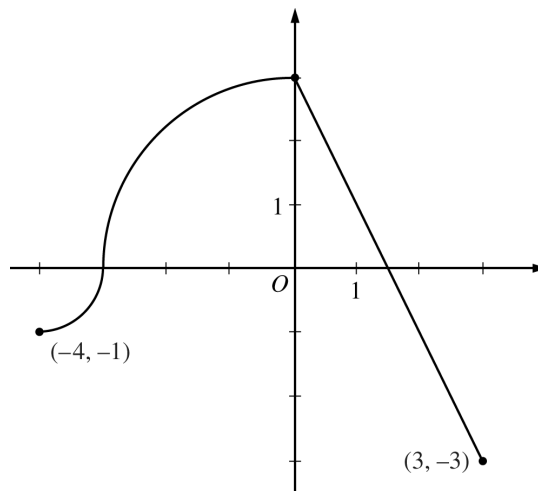
AP[®] CALCULUS BC
2011 SCORING GUIDELINES

Question 4

The continuous function f is defined on the interval $-4 \leq x \leq 3$. The graph of f consists of two quarter circles and one line segment, as shown in the figure above.

Let $g(x) = 2x + \int_0^x f(t) dt$.

- (a) Find $g(-3)$. Find $g'(x)$ and evaluate $g'(-3)$.
- (b) Determine the x -coordinate of the point at which g has an absolute maximum on the interval $-4 \leq x \leq 3$. Justify your answer.
- (c) Find all values of x on the interval $-4 < x < 3$ for which the graph of g has a point of inflection. Give a reason for your answer.
- (d) Find the average rate of change of f on the interval $-4 \leq x \leq 3$. There is no point c , $-4 < c < 3$, for which $f'(c)$ is equal to that average rate of change. Explain why this statement does not contradict the Mean Value Theorem.



Graph of f

(a) $g(-3) = 2(-3) + \int_0^{-3} f(t) dt = -6 - \frac{9\pi}{4}$
 $g'(x) = 2 + f(x)$
 $g'(-3) = 2 + f(-3) = 2$

$$3 : \begin{cases} 1 : g(-3) \\ 1 : g'(x) \\ 1 : g'(-3) \end{cases}$$

(b) $g'(x) = 0$ when $f(x) = -2$. This occurs at $x = \frac{5}{2}$.
 $g'(x) > 0$ for $-4 < x < \frac{5}{2}$ and $g'(x) < 0$ for $\frac{5}{2} < x < 3$.
 Therefore g has an absolute maximum at $x = \frac{5}{2}$.

$$3 : \begin{cases} 1 : \text{considers } g'(x) = 0 \\ 1 : \text{identifies interior candidate} \\ 1 : \text{answer with justification} \end{cases}$$

(c) $g''(x) = f'(x)$ changes sign only at $x = 0$. Thus the graph of g has a point of inflection at $x = 0$.

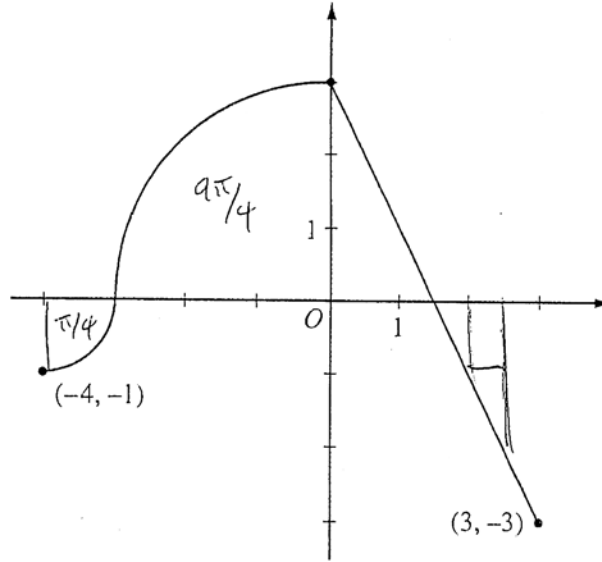
1 : answer with reason

(d) The average rate of change of f on the interval $-4 \leq x \leq 3$ is
 $\frac{f(3) - f(-4)}{3 - (-4)} = -\frac{2}{7}$.

$$2 : \begin{cases} 1 : \text{average rate of change} \\ 1 : \text{explanation} \end{cases}$$

To apply the Mean Value Theorem, f must be differentiable at each point in the interval $-4 < x < 3$. However, f is not differentiable at $x = -3$ and $x = 0$.

NO CALCULATOR ALLOWED



Graph of f

Work for problem 4(a)

$$g(-3) = 2 \cdot (-3) + \int_0^{-3} f(t) dt = -6 - \frac{9\pi}{4}$$

$$g'(x) = \frac{d}{dx} (2x + \int_0^x f(t) dt) = 2 + f(x)$$

$$g'(-3) = 2 + f(-3) = 2 + 0 = 2$$

Work for problem 4(b)


$g'(x)$

$$g'(x) = 0$$

$$2 + f(x) = 0$$

$$f(x) = -2$$

$$x = 5/2$$



check endpoints

~~$g(-4) = -8 + \int_0^{-4} f(t) dt = -8 - 2\pi$~~

$$g(-4) = -8 + \int_0^{-4} f(t) dt = -8 - 2\pi$$

$x = 5/2$, because g' going from + to - proves it as the only relative maximum and $g(5/2)$ is greater than g at either endpoint.

$$g(5/2) = 5 + \int_0^{5/2} f(t) dt = 5 + 5/4$$

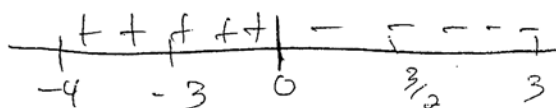
$$g(3) = 6 + \int_0^3 f(t) dt = 6$$

Do not write beyond this border.

NO CALCULATOR ALLOWED

Work for problem 4(c)

$$g''(x) = \frac{d}{dx}(g'(x)) = f'(x)$$



~~The~~ The only point of inflection for g is at $x=0$, since $f'(x)$, which is equivalent to g'' , only changes signs at $x=0$ on the interval $-4 \leq x \leq 3$

Work for problem 4(d)

$$\text{Avg. Rate of change} = \frac{f(3) - f(-4)}{3 - (-4)}$$

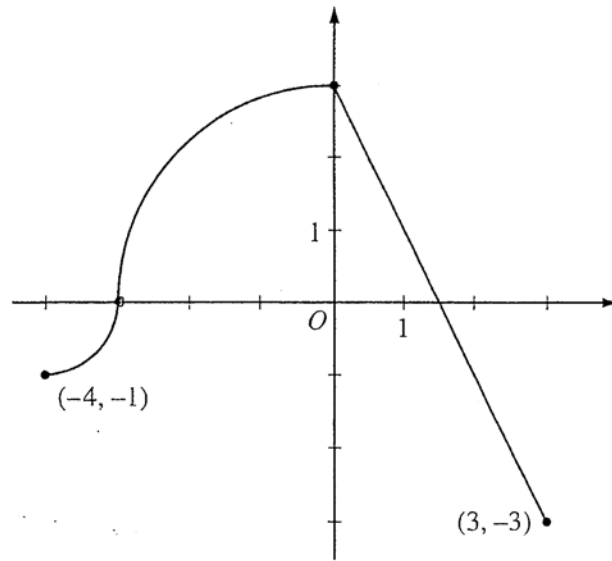
$$= \frac{-3 - -1}{3 + 4} = \frac{-2}{7}$$

Because Mean Value Theorem only applies when the function is continuous AND differentiable on the interval, which doesn't apply here since $f(x)$ isn't differentiable at $x=0$.

Do not write beyond this border.

DO NOT WRITE BEYOND THIS BORDER.

NO CALCULATOR ALLOWED



Graph of f

Work for problem 4(a)

a. $g(-3) =$

$$g(-3) = 2(-3) + \int_{-3}^0 f(t) dt$$

\downarrow
 $\frac{\pi r^2}{4}$

\downarrow
It's the area of a circle with the radius of 3, and divided by 4.

$$-6 + \frac{9\pi}{4} =$$

$$\rightarrow g(-3) = -6 + \frac{9\pi}{4}$$

$$g'(x) = 2 + f(x)$$

$$g'(-3) = 2 + 0$$

$$g'(-3) = 2$$

Work for problem 4(b)

absolute maximum can be found by equating the derivative of g to zero

$$g'(x) = 2 + f(x) = 0$$

$$-2 = f(x)$$

g has an absolute maximum when $x = 2.5$.

Do not write beyond this border.

Do not write beyond this border.

Work for problem 4(c)

where g has a point of inflection =
 when $g''(x)$ is zero.

$$g(x) = a + f(x)$$

$$g''(x) = f''(x)$$

$$0 = f''(x)$$

so when the f is experiencing
 its max/min.

g has points of inflection when
 x is equal to $-4, 0,$ and -3 .

because

the point of inflection is found when
 the second derivative is equal to zero

(or changes signs).

$f''(x)$ equal to zero $f''(x)$.

I equated $f''(x)$ to zero. When the
 function is experiencing its
 point of inflection, the second deriv. = 0.

∴ I found x values to be $-4, 0,$ and 3 .

Work for problem 4(d)

the average rate of change

$$\frac{f(3) - f(-4)}{3 - (-4)} = \frac{-3 + 1}{7} = \frac{-2}{7}$$

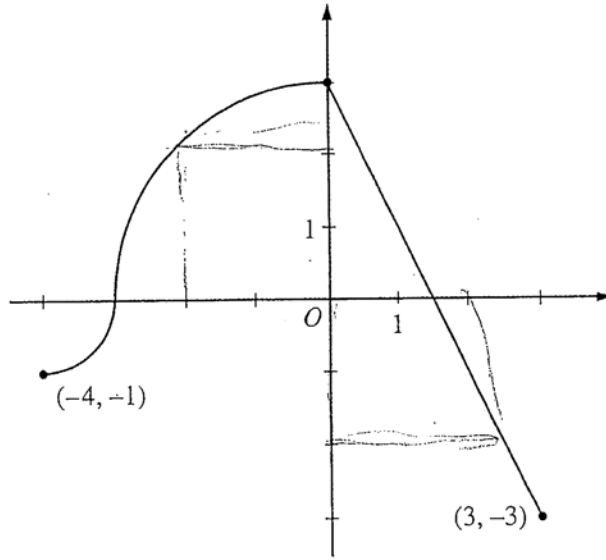
the average rate of change is $\left(\frac{-2}{7}\right)$

the mean value theorem states

1. if all values of x are differentiable in the closed interval $[a, b]$
 2. if all values of x is continuous in the open interval (a, b)
- then there exists a value $f'(c) = \frac{f(b) - f(a)}{b - a}$.

however, f does not meet the requirements of the mean value theorem
 because it is not differentiable when $x=0$.

NO CALCULATOR ALLOWED



Graph of f

Work for problem 4(a)

$$g(x) = 2(x) + \int_0^x f(t) dt$$

$$g(-3) = -6 + \frac{1}{4}\pi(3)^2$$

$$g(-3) = -6 + \frac{9}{4}\pi$$

$$g'(x) = 2 + f(x)$$

$$g'(-3) = 2 + f(-3)$$

$$g'(-3) = 2$$

Work for problem 4(b)

max occurs where $g'(x) = 0$ and where $g'(x)$ changes sign from + to -

$$g'(x) = 2 + f(x)$$

$$0 = 2 + f(x)$$

$$-2 = f(x)$$

$$\text{at } x = 2 \text{ here's a max}$$

Do not write beyond this border.

4

4

4

4

4

4

4

4

4

4

4C2

NO CALCULATOR ALLOWED

Work for problem 4(c)

 $g''(x) = 0$ means there's an inflection point

$$g''(x) = f'(x)$$

$$0 = f'(x)$$

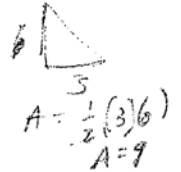
So spots where slope $f'(x) = 0$ or DNE,the only such spot occurs at $x=0$ and at $x=-3$ where it's undefined

Work for problem 4(d)

$$\text{avg rate of change} = \frac{1}{3 - (-4)} \int_{-4}^3 f(x) dx$$

$$\frac{1}{7} \left[\frac{1}{4}\pi + \frac{9}{4}\pi + 9 \right]$$

$$\frac{1}{7} \left[\frac{10}{4}\pi + 9 \right] = \text{avg rate of change}$$

~~2 quarter circles~~
3 quarter circle
1:4 a triangle

Do not write beyond this border.

AP[®] CALCULUS BC
2011 SCORING COMMENTARY

Question 4

Overview

This problem provided the graph of a continuous function f , defined for $-4 \leq x \leq 3$. The graph consisted of two quarter circles and one line segment. The function g is defined by $g(x) = 2x + \int_0^x f(t) dt$. Part (a) asked for $g(-3)$, an expression for $g'(x)$, and the value of $g'(-3)$. These items tested the interpretation of a definite integral in terms of the area of a region enclosed by the x -axis and the graph of the function given in the integrand, as well as the application of the Fundamental Theorem of Calculus to differentiate a function defined by an integral with a variable upper limit of integration. Part (b) asked for the x -coordinate of the point at which g attains an absolute maximum for $-4 \leq x \leq 3$. Several approaches were possible, but they all begin with identification of candidates using the expression for $g'(x)$ found in part (a). Part (c) asked for locations of points of inflection for the graph of g , involving another analysis of $g'(x)$. Part (d) asked for the average rate of change of f on $-4 \leq x \leq 3$, and tested knowledge of the hypotheses of the Mean Value Theorem to explain why that theorem is not contradicted given the fact that its conclusion does not hold for f on $-4 \leq x \leq 3$.

Sample: 4A

Score: 9

The student earned all 9 points.

Sample: 4B

Score: 6

The student earned 6 points: 2 points in part (a), 2 points in part (b), no point in part (c), and 2 points in part (d). In part (a) the student makes a sign error in evaluating $g(-3)$ but correctly determines $g'(x)$ and evaluates $g'(-3)$, thus earning 2 of the 3 points. In part (b) the student earned the first 2 points for considering where $g'(x) = 0$ and correctly identifying 2.5 as the interior candidate for the x -coordinate of the absolute maximum. The student does not justify this as giving the absolute maximum, and so the last point in part (b) was not earned. In part (c) the student gives incorrect x -coordinates for the point of inflection. In part (d) the student's work is correct.

Sample: 4C

Score: 3

The student earned 3 points: 2 points in part (a), 1 point in part (b), no point in part (c), and no points in part (d). In part (a) the student makes a sign error in evaluating $g(-3)$ but correctly determines $g'(x)$ and evaluates $g'(-3)$, thus earning 2 of the 3 points. In part (b) the student earned the first point for $g'(x) = 0$. The student solves the equation incorrectly. In part (c) the student gives an incorrect x -coordinate for the point of inflection. In part (d) the student does not correctly compute the average rate of change and does not provide an explanation for why the Mean Value Theorem does not apply.